

HOLIDAY PACKAGE TERM II 2022
P.2 LITERACY 1

Name: **Stream:**.....

SECTION A

1. What is a school?

2. Write any school symbol.

3. Which animal guards our home?

4. Who keeps law and order?

5. Name any building found at school.

6. What is a home?

7. Who heads a school?

8. Which part of the body is used for walking?

9. What are domestic animals?

10. Name one important place in the community.

11. A young plant is called

12. Why do we eat food?

13. Name one source of food.

14. A fry is a young one of a

15. An insect is small animal with

legs.

16. The larva stage of a housefly is called

17. Give one reason why animals move from one place to another.

18. How many legs does a spider have?

19. Which insect spreads malaria?

20. What do we call a person who grows crops and keeps animals?

SECTION B

21. Name any four common foods you know.

i)

ii)

iii)

iv)

22. Write any four examples of insects you know.

i)

ii)

iii)

iv)

23. Match animals to their weapons.

Man

fang

Bee


beak

Bird

sting

Snake

hands



24. Name three main body parts of an insect.

i) _____ ii)

iii)

25. Name four school symbols.

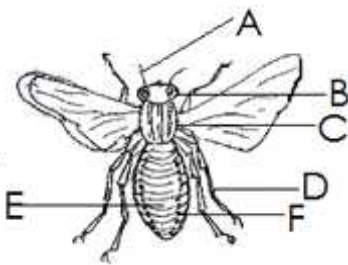
i)

ii)

iii)

iv)

26. Name the parts of an insect.



A: Feeler

B:

C:

D:

E:

F:

27. _____ is the movement of people and their goods from one place to another.

28. Name four things which cause us accidents.

i)

ii)

iii)

iv)

29. Write down any two types of transport.

i)





ii)

30. Mention any two wild animals.

i)

ii)

31. Name the road signs below.

(zebra crossing, No parking, bridge, humps)

32. Draw these things got from animal skins.

--	--	--	--





shoes	bag	belt	drum

33. Give two uses of water.

i)

ii)

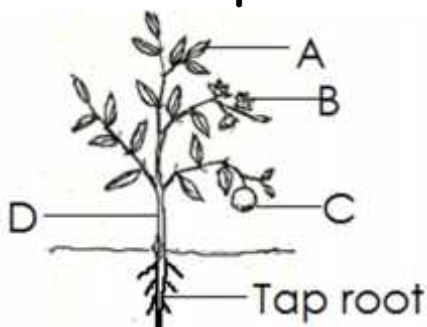
34. Name the things we make.

35. The first help given to an injured person before taken to hospital is called

(First aid, accident)

36. Name the parts of a plant.



A =

B =

C =

D =

(leaf, stem, roots, fruit, tap root, flower)

37. Draw these means of transport below.

car	lorry	train
boat	aeroplane	

38. Match correctly.

Nurse

Gate keeper

Librarian

Matron

dormitory

library

gate

sick bay

39. Mention any four things found in our classroom.

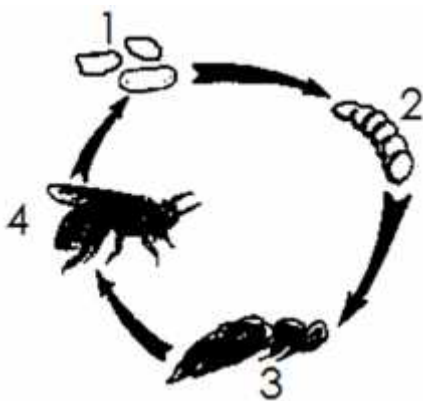
i)

ii)

iii)

iv)

40. Name stages of a house fly.



1 =

2 =

3 =

4 =

*****GOD BLESS*****